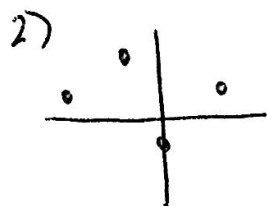
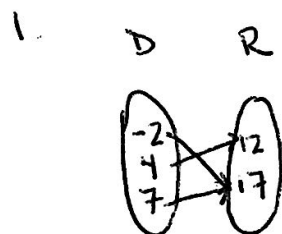


Practice Quiz - Function Basics

Name _____


Date _____ Block _____

Are the following functions?



3)

x	y
-2	5
1	7
1	10



5. $\{(-7, 1), (3, 4), (-1, 0), (2, 4)\}$

Domain = _____

Range = _____

Is it a function?

6. For $f(x) = 3x^2 - 2x + 4$

A. Find $f(5)$

B. Find $f(-2)$

C. Find $f(3a)$

D. Find $f(x+1)$